




Thank You For Downloading!



TRANSPORTATION SIMPLE MATH

Print out Transportation Simple Math pack.



Child may use transportation pictures to help solve the simple math problems. Have child write the correct answer on the line after the math problem.





Clip Art Credit





TRANSPORTATION MATH



$$1 + 2 = \underline{\hspace{2cm}}$$





$$1 + 1 = \underline{\hspace{2cm}}$$





$$2 + 3 = \underline{\hspace{2cm}}$$

TRANSPORTATION MATH



$$1 + 3 = \underline{\hspace{2cm}}$$



$$2 + 2 = \underline{\hspace{2cm}}$$



$$4 + 1 = \underline{\hspace{2cm}}$$